


Year 2 Sample Reasoning Paper Materials

- 1 Max buys a bag of **12** apples.





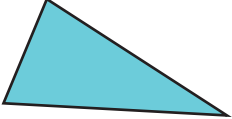
He eats **2** apples **every day**.

How many **days** does it take Max to eat all of the apples?

 days


1 mark

- 2 Write the number of **sides** for each shape.

Shape	Number of sides
	
	
	

1 mark

3



There are **15** pieces of fruit altogether.

What **fraction** of the fruit is bananas?

Circle the correct fraction below.

$$\frac{1}{2}$$

$$\frac{1}{3}$$

$$\frac{1}{4}$$

$$\frac{3}{4}$$



1 mark